

THIRD SEMESTER DIPLOMA EXAMINATION IN ARCHITECTURE - March 2013

ARCHITECTURAL DRAWING – I

Maximum Marks : 100

Time : 3 Hrs

- Note :**
1. Question No.IV is compulsory.
  2. Assume any missing data.
  3. One butter sheet and one tracing sheet of size 65cm x 50cm to be supplied.
  4. Sketch on next page.

**PART- A**

(Maximum marks: 10)

- I. Answer the following questions in one or two sentences. Each question carries two marks

Marks

- 1 Define SCALE.
- 2 What is meant by building plan?
- 3 Show the symbol of double shuttered door.
- 4 What is meant by vernacular architecture?
- 5 Show the symbol of stone work in section.

[5x2 =10]

**PART - B**

- II Draw plan, elevation and section of a Tea-poy in 1:20 scale. Assume suitable dimensions.

[20]

- III Draw plan, elevation and section of a Dining table in 1:20 scale. Assume suitable dimensions

[20]

**PART - C**

- IV Draw plan, elevation and section of a Residence, the line sketch of which is given in fig.no.I

Drawing shall include:

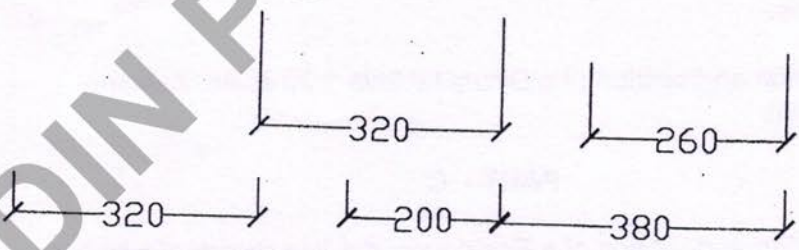
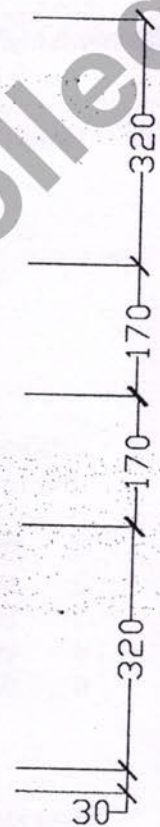
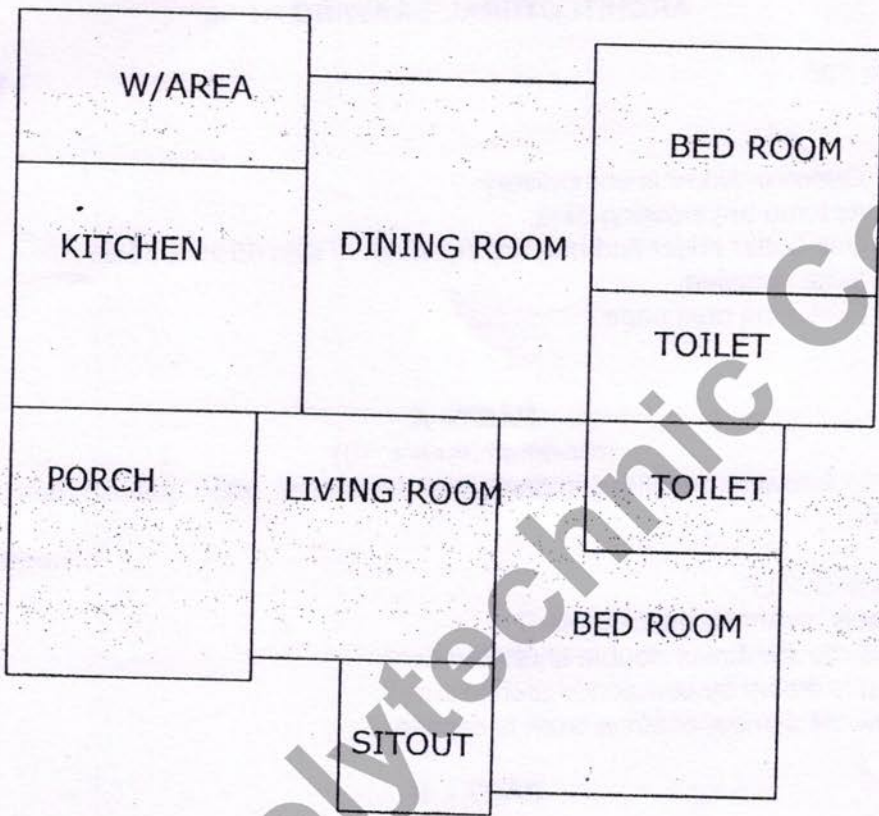
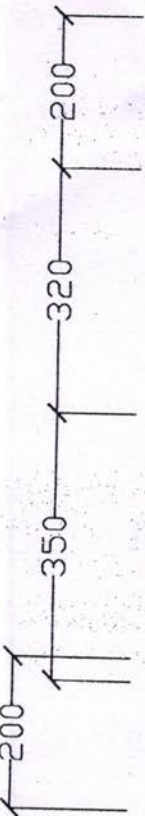
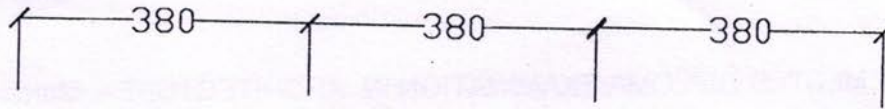
1. Plan - 1:100 - 30 marks
2. Elevation - 1:100 - 15 marks
3. Section - 1:100 - 25 marks

\*\*\*\*\*

TED (10) 3031

TED(10)  
(Revisio

T



Maximu

I.

II

III

IV

V

VI

VII

VIII

IX

FIG - 1

# CENTRE -LINE SKETCH OF A RESIDENCE

ALL DIMENSIONS ARE IN CMS  
CENTRE -TO-CENTRE DISTANCES ARE GIVEN.